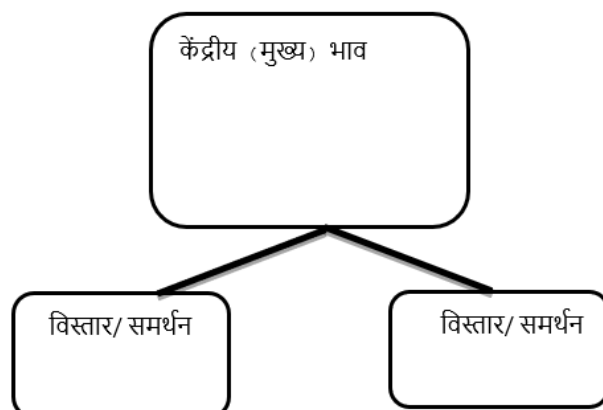


ENGLISH

1. Write any four wishes of your life. Give reason for each selection of your wishes.
2. Imagine you have witnessed that a new comer in your school has become a victim of misbehaviour of some of your classmates. Write how will you resolve the situation?
3. Write down the abstract noun form of the following adjectives:-
 - a. Compassionate -
 - b. Imaginative -
 - c. Miserable -
 - d. Silent -
4. Pick out the abstract nouns in the following sentences:
 - a. We have to get at the truth of the matter.
 - b. I was delighted at the news of her success.
 - c. They laughed at my idea.
 - d. We snatched our freedom from the British rulers.
5. Prepare a web chart showing your 5 feelings on the following situation.
'Your first day in a new school after getting transferred'.
6. Imagine you have fractured your leg while playing football for which doctor prescribed to take rest for 1month. Write down a leave application to the principal regarding this matter.

HINDI

1. किसी भी तीन स्वतंत्रता सेनानियों का चित्र चिपकाकर एवं उनके द्वारा दिए गए नारों का पोस्टर बनाइए ।
(कॉपी में)
2. अपने मित्र से बातचीत करते हुए, संवाद के रूप में पेड़ों के महत्व के बारे में लिखिए ।
3. कठिन परिस्थिति में अगर हम निराश हो जाएँगे तो क्या होगा? ऐसी परिस्थिति में हमें किस तरह से काम लेना चाहिए?
4. प्रस्तुत गद्यांश का केंद्रीय भाव लिखकर उसके समर्थन में दो वाक्य भी लिखिए –
किसी व्यक्ति की सेवा या उसे किसी भी प्रकार की मदद पहुँचाने की क्रिया को परोपकार कहते हैं । ऐसा उपकार जिसमें कोई अपना स्वार्थ न हो उसे परोपकार कहते हैं । परोपकार को सबसे बड़ा धर्म कहा गया है और करुणा, सेवा सब परोपकार के ही पर्यायवाची हैं । जब किसी व्यक्ति के अंदर करुणा का भाव होता है तो वह परोपकारी भी होता है।



BENGALI

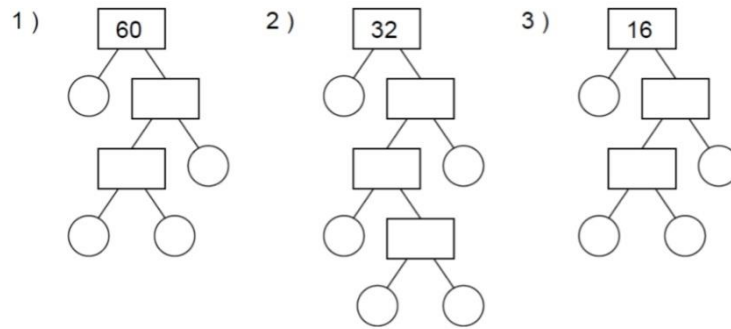
১. রাজা ভবচন্দ্র প্রহরীদের কী আজ্ঞা দিয়েছিলেন?
২. 'রক্ষিগণ কত জনকে কেন গ্রেপ্তার করে রাজ সন্নিধানে নিয়ে গিয়েছিল?
৩. 'ভৃত্যদের এ ভার দিতে পারলেন না'- কে ভৃত্যদের কোন্ ভার দিতে পারলেন না?
কেন দিতে পারলেন না?
৪. 'ব্রাহ্মণের কুসংস্কার' গল্পে উল্লেখিত কুসংস্কার গুলি লিপিবদ্ধ কর।
৫. নিম্নলিখিত বর্ণগুলি একত্র করে শব্দ গঠন কর:
ক) ন্ + আ + ব্ + ই + ক্ + অ =?
খ) স্ + উ + র্ + য্ + অ =?
৬. নিচের বর্ণগুলির বিশ্লেষণ করে দেখাও:
ক) সানাই
খ) মরীচিকা
৭. প্রতি বর্ণের দ্বিতীয় ও চতুর্থ বর্ণকে কী নামে অভিহিত করা হয়? কেন?
৮. রবি বাবু ...উ...উ..উ.. উ এটি কোন্ স্বরের উদাহরণ? কোন্ কোন্ ক্ষেত্রে
এই স্বরের ব্যবহার হয় উদাহরণ সহযোগে লেখো।

MATHS

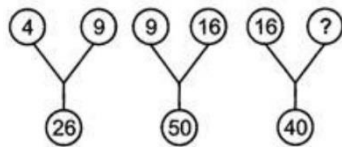
- 1.(a) Digit in thousands place of the product of 5930 and 782 is
(i) 3 (ii) 2 (iii) 7 (iv) 4
- (b) Shweta is standing in a row. If she is 14th from left end and 8th from right end, how many people are standing in the row?
(i) 21 (ii) 15 (iii) 13 (iv) 18
- (c) In the following question, select the missing number from the given series

60	72	84	96	?
----	----	----	----	---
- (i) 102 (ii) 120 (iii) 90 (iv) 108
- (d) Which digit should come at the place of * to make the number 7813 * divisible by 3?
(i) 3 (ii) 4 (iii) 7 (iv) 2

2. (a) Find the prime factors of the following numbers:



(b) Find the missing number



(c) Find the difference between the greatest and the smallest number of 8 digits using the digits 5,8,2,0,4,2,0,9

(d) Price of each shirt is Rs.400/- and price of each trouser is Rs.300/-. If you want to buy 3 pairs of dress how much money will you have to pay?




(e) Rahul's age is a factor of 14. Next year his age will be a multiple of 5. How old will he be after 6 years.

3.(a) In a school there are a total of 2476 students and teachers. The total number of teachers and boys is 1289. Total number of girls and teachers is 1246. How many teachers are there in the school?

(b) Complete the following crossword, writing the answer in words.

Across		Down	
1.	Multiple of 7	1.	Number of times 10 divides by 5
3.	Multiple of 5	2.	Multiple of 10
5.	Factor of 24	4.	Factor of 27
6.	Has factors 2 and 5	6.	Factor of 27
9.	Factor of 42	7.	Factor of 6
		8.	Multiple of 2



SCIENCE

For Q. No. 1 to 3, choose the correct option from the choices given against each question:

1. The Process of taking in of Oxygen rich air is termed as _____
a) breathing b) inhalation c) exhalation d) circulation
2. The band like tissue which joins two bones in our body is called _____
a) ligaments b) cartilage c) lungs d) brain
3. _____ acts as the sense organ in fishes for detection of prey and enemies.
a) Feelers b) Tongue c) Eyes d) Nose
4. _____ are plants that feed on insects by trapping them.
a) Insectivorous plants b) Creepers c) Climbers d) Shrubs

5. **Rewrite the following statement correctly:**

The middle ear helps us to hear and maintain balance of our body.

6. **Rewrite the following statement correctly:**

The micropyle allows water to enter the leaves.

Name one plant for each of the following cases.

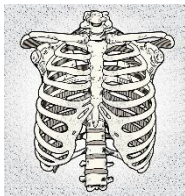
7.
 - a. Plant that grow through roots.
 - b. Plants that grow through leaves.

8. Name the organs protected by the part displayed in the images given below:

Part

Organ / Organs Protected

A.

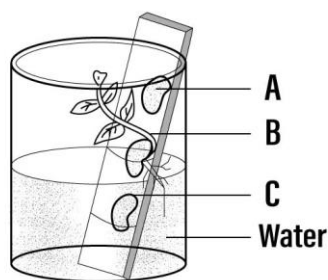


B.



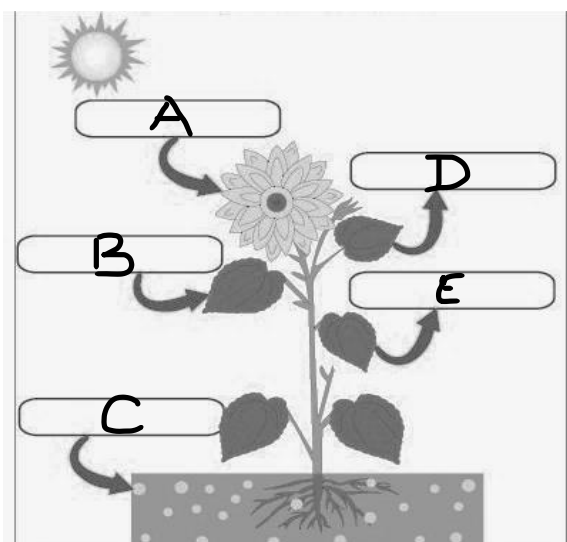
9. Explain why the last two ribs of human being are called ‘floating ribs’?

10. The diagram given below shows an experiment conducted by a student of STD. V. Based on the observations answer the questions that follow.




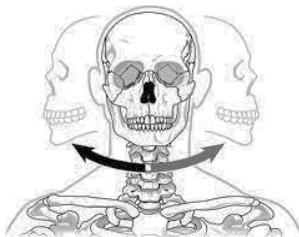
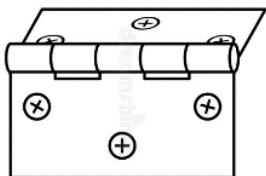
- Name the process which is seen in the Seed B.
- Name the factors responsible for the above process.
- 'Seeds A & C failed to show any result' - Justify.

11. Observe the picture carefully and answer the questions that follow.



- Name the process depicted in the image given alongside.
- Name the components labelled A to E.
- Name the source for component A, B & C
- Name the importance of D & E in our daily life.

11. Complete the table given below:

TYPE OF JOINT	PLACE WHERE IT IS FOUND	TYPE OF MOVEMENT
	_____	_____
_____		_____
	_____	_____

SOCIAL SCIENCE

A. Choose the correct option-

- i) The care and _____ for one another are the real strength of the family.
a) Appreciation c) Love
b) Care d) Truthfulness
- ii) The settled life began only after the man became a _____.
a) Food producer c) Food consumer
b) Food gatherer d) Food bearer
- iii) It is harvesting season , Ram and his friends are working as labourer in the agricultural field of Ratan Singh in Patiala. After the harvesting season they will lose their jobs . Identify the type of employment they are engaged into.
a) Seasonal employment c) Permanent employment
b) Non permanent employment d) Disguised unemployment
- iv) Find out the reason behind the September 2014 , Kashmir valley flood.
a) Deforestation c) Heavy construction on mountains
b) Afforestation d) Soil erosion
- V) The activities that occur regularly and hold special meaning for that family. Identify the above said activities.
a) Values c) House hold chores
b) Customs and traditions d) Other responsibilities

B. Answer the following questions -

- Q1. All families support in times of emergency. It helps the sufferer to overcome difficulties. State that the above statement is true or false and support your answer with an example .
- Q2. You are a member of village panchayat .List any three precautions you will take to deal with any natural disaster in your village.
- Q3. Name the “Seven wonders of the natural world”. Why and where the Wildebeest migrate ?
- Q4. Identify the values you have learned from your family.

C. Mark the following in Political map of India .

1. A state affected by Hud Hud cyclone.
2. A state from where migrants travel to other places as labourer .
3. A UT affected by flood of River Jhelum.
4. A state with sloping roof house.
5. State where Bhimbetka Caves is located.

SANSKRIT

1) स्वरवर्णन रिक्तस्थानानि पूरयतु

- i) अ,आ____,ई
- ii) _____,_____ ऋ
- iii) ओ_____

II) व्यञ्जनवर्णन रिक्तस्थानानि पूरयतु

i) क, ख____ घ____,

ii) _____, _____, ज, झ, _____

iii) ट____ ड, ढ, _____

iv) य____ ल____

v) _____ ष, स, _____

III) हिन्दी भाषायां लिखतु -

i) मधुरा-

ii) अत्र तत्र-

iii) खगाः -

IV) संस्कृतभाषायां लिखतु

i) भी -

ii) है-

iii) सब-

V) एष/एषा लिखतु


i) _____ महिला

ii) _____ बालकः

iii) _____ नर्तकी

iv) _____ लेखकः

VI) चित्रं दृष्ट्वा रिक्तस्थानानि पूरयतु



i) _____



ii) _____



iii) _____



iv) _____

NOTE : HOLIDAY HOMEWORK FOR ALL SUBJECT TO BE DONE IN YOUR SUBJECT NOTEBOOKS PROVIDED BY THE SCHOOL.